

Name: _____ Date: _____

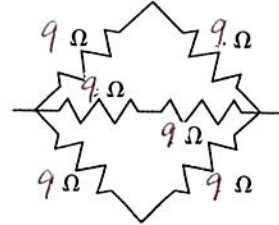
Calculating Total Resistance (2)

Calculate the total resistance (R_T) for the following combinations of resistors.

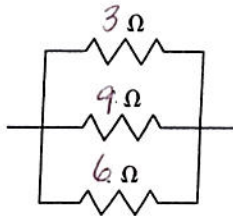
(a)



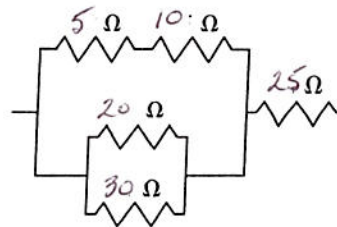
(f)



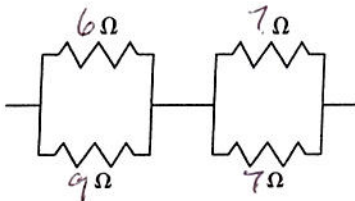
(b)



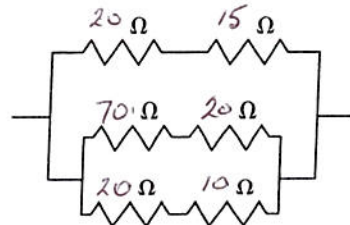
(g)



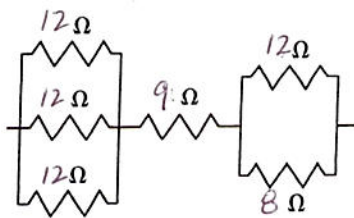
(c)



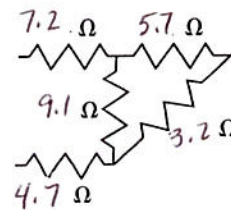
(h)



(d)



(i)



(e)

